




Square Numbers

1. Is the number 9 a square number? Use words or draw a picture to explain how you know.

2. Is the number 8 a square number? Use words or draw a picture to explain how you know.

3. TRICKY QUESTION: One of these numbers is a **square number**. Which one is it?



Use words or draw a picture to explain how you know.
