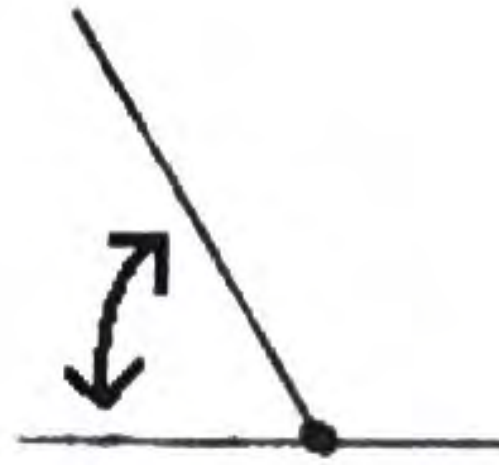
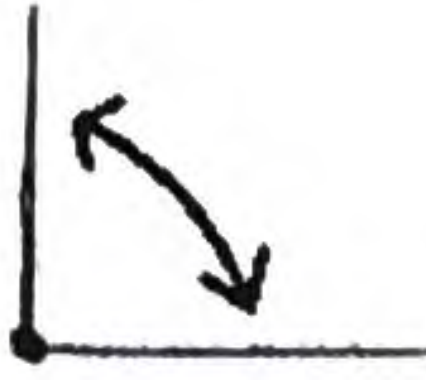
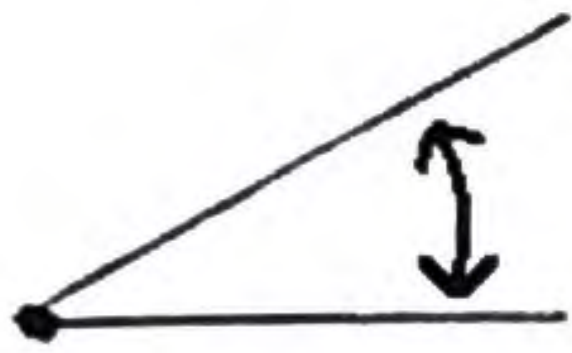


Angles

1. Estimate the size of these angles:



2. How big is each angle in a square?



3. Which angle looks just like a straight line?

4. Circle the triangle that is made of all 60° angles?



5. What size angles do perpendicular lines make?

6. A 0° angle looks a lot like what other angle?

7. HARD QUESTION: How big is the angle on the other side of the 210° angle?

